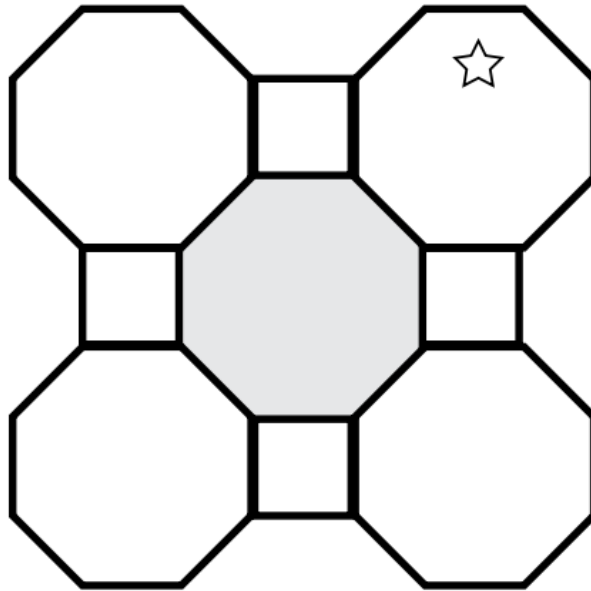


Fraction Puzzler

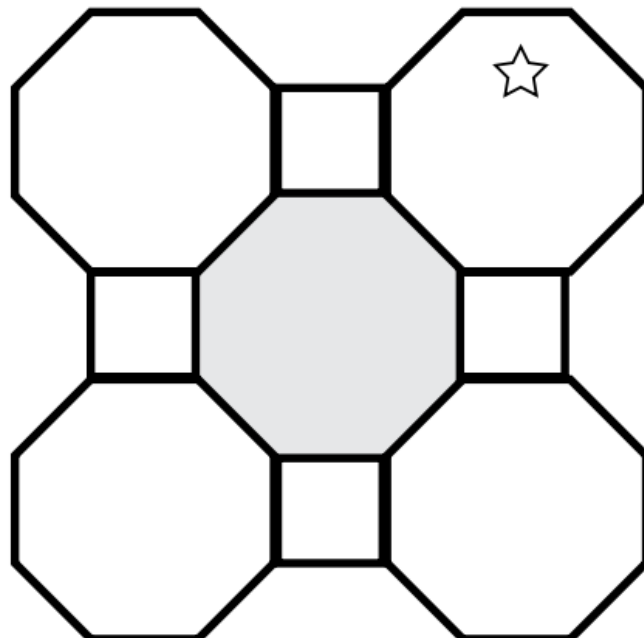
Place the fractions from the fraction bank inside the eight shapes so that no two adjacent shapes have equivalent fractions. The numerators must increase starting with the star and moving clockwise. Be careful, there are several fractions that will not be used.

| FRACTION BANK | |
|-----------------|-----------------|
| | |
| $\frac{2}{6}$ | $\frac{16}{20}$ |
| $\frac{5}{15}$ | $\frac{1}{3}$ |
| $\frac{9}{27}$ | $\frac{21}{63}$ |
| $\frac{20}{25}$ | $\frac{4}{5}$ |
| $\frac{8}{10}$ | $\frac{18}{54}$ |

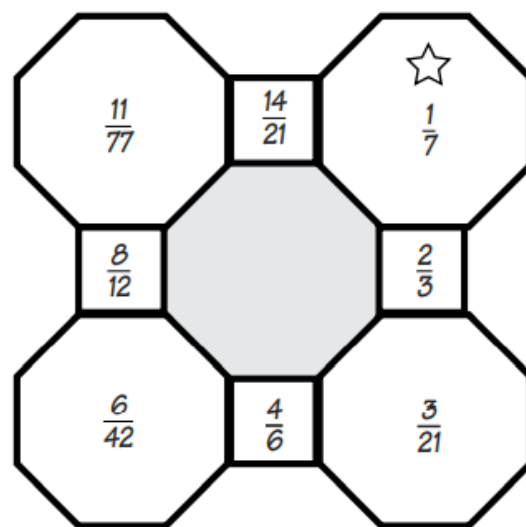
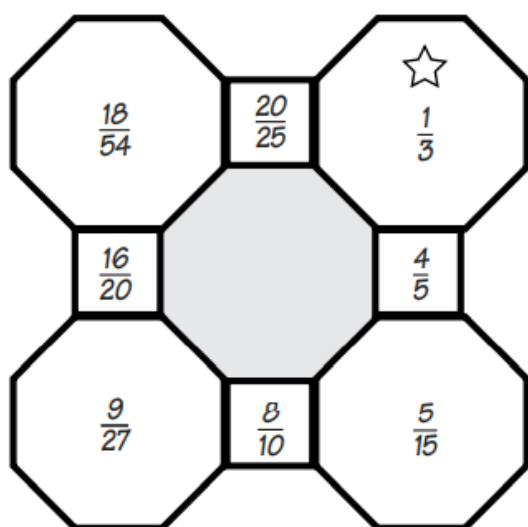


Follow the same directions.

| FRACTION BANK | |
|-----------------|-----------------|
| | |
| $\frac{3}{21}$ | $\frac{11}{77}$ |
| $\frac{2}{3}$ | $\frac{2}{14}$ |
| $\frac{8}{12}$ | $\frac{1}{7}$ |
| $\frac{14}{21}$ | $\frac{3}{91}$ |
| $\frac{4}{6}$ | $\frac{6}{42}$ |
| $\frac{12}{84}$ | |



Answers



Λ